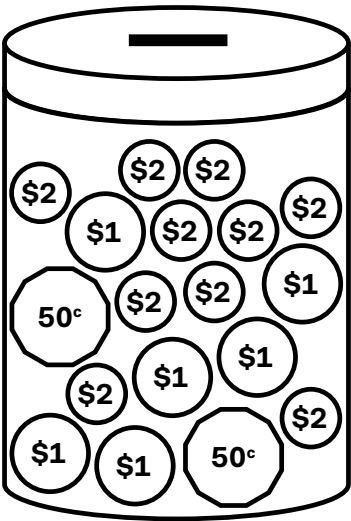


The best saver.



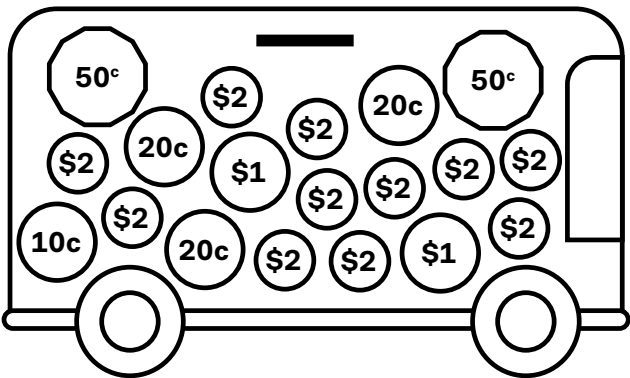
Below are the money boxes of Sam, Charlie, Ash and Bailey. They have saved their money from doing jobs around the house. Add up the coins in each to see who has saved the most, and then think about jobs you could do to earn pocket money and write them on the line under the moneyboxes.

Charlie



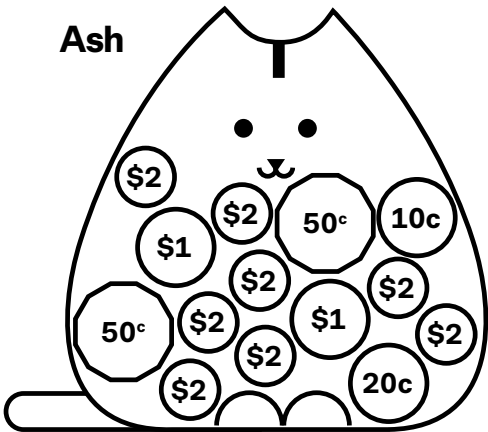
Total: \$ _____

Sam



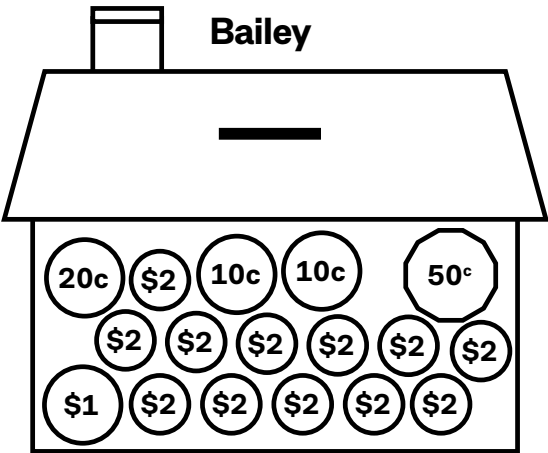
Total: \$ _____

Ash



Total: \$ _____

Bailey



Total: \$ _____

Jobs that I could do around the house:

